



Illuminating Global Education Through Indianic Values

NEW STANDARD GROUP OF INSTITUTES



**HOME
ASSIGNMENT**

2026

Name.....

Class.....^{1ST}.....Sec.

Branch.....

हिन्दी—

1. नीचे दिए गए वर्णों की सहायता से नए शब्द बनाइए—

(क त र ल स म ह न श ग)

(I) नगर (II) _____

(III) _____ (IV) _____

(V) _____ (VI) _____

2. वर्णों को सही क्रम में लिखकर शब्द बनाइए—

(I) ल क म _____ (II) क श ल _____

(III) ट म र _____ (IV) ट प न घ _____


(V) ग र न _____ (VI) ट न ब _____

3. अपने पसंदीदा 'फल' का नाम लिखकर उसके बारे में चार पंक्तियाँ लिखिए—

फल— _____


4. चित्र को देखकर कोष्ठक से उचित शब्द की सहायता से वाक्य पूरे कीजिए।

- (I) यह मेरा _____ है। (घर/स्कूल)
 (II) मेरा घर बहुत _____ है। (सुंदर/बेकार)
 (III) मेरा घर _____ मंजिला है। (दो/आठ)
 (IV) मेरे घर के लोग _____ है। (अच्छे/बुरे)
 (V) मेरा घर _____ रहता है। (साफ/गंदा)




ENGLISH

1- Unscrambled the words and write them in the provided blank.



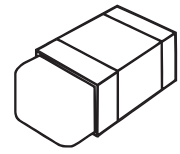
g t a o




t h a n p l e e




t d y d e e b a r




s e r r a e




k o o b



b g a



m o n l e



o a r g e n

2- Make a sentence from the given words.

(I) SUN _____

(II) NEST _____

3- Complete the word pairs by choosing the word from the option.

(a) First and _____.

(i) then

(ii) last

(iii) third

(b) In and _____.

(i) into

(ii) up

(iii) out

(c) Left and _____.

(i) right

(ii) front

(iii) back

(d) Day and _____.

(i) morning

(ii) noon

(iii) night

(e) Thread and _____.

(i) pin

(ii) needle

(iii) nail

(P.T.O)

4- Spell the missing words.

(a) There are ten teachers at my s_____.

(b) The s_____ in the night sky are very bright.



(c) Wash your hands with _____ and water.

(d) I put a s_____ of cheese on my bread.







5- Complete the cursive writing book up to Page no. 27 in neat and clean handwriting.

MATHS

1- Count and write the number for each object shown below.

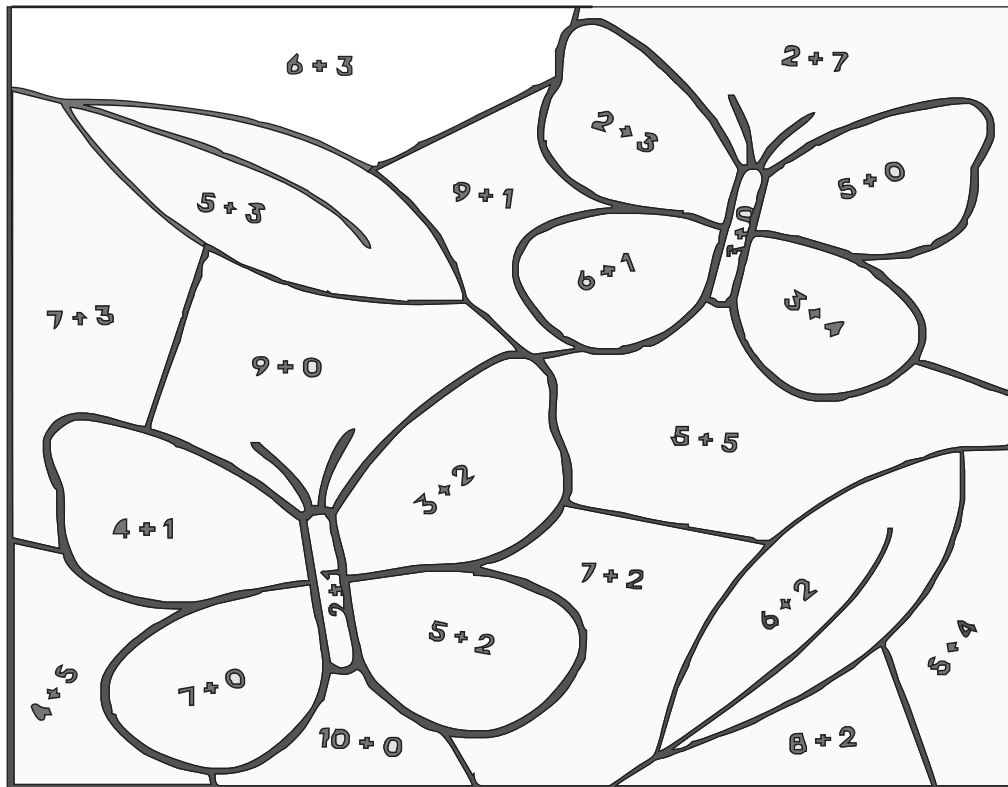


2- Write before and after of given numbers:



(P.T.O.)

3- Colour by addition:



9 = Blue 3 = Black 8 = Green 7 = Orange 10 = Red 5 = Yellow

4- Read and circle the correct numbers:

(i) Twenty three- 14, 22, 25, 23, 18

(ii) Eleven- 12, 33, 11, 39, 20

(iii) Fifty- 10, 15, 50, 5, 55

(iv) Forty nine- 94, 40, 69, 44, 49

(v) Thirty six- 36, 63, 73, 43, 56

5- Write the number names of the following numbers:

(i) 26- _____


(ii) 16- _____

(iii) 45- _____

(iv) 78- _____

(v) 89- _____

1-(a) Write the names of the three main seasons.



(b) Colour the correct clouds in the sentences given below.

(i) Cotton clothes keep us cool / warm

(ii) We wear same / different clothes in different seasons.

(iii) We wear cotton / woollen clothes in summers.

(iv) A sweater is worn in summer / winters

(v) Rain coat protects us from heat / rain

2- Match the following statements to the correct pictures.

1- Take bath daily



2- Sleep on time



3- Eat vegetables and fruits



4- Brush your teeth twice a day



5- Exercise daily



3- Write "Yes" or "No" for each statements.



















- (a) We should write on the classroom walls. _____
- (b) We should flush the toilet after use. _____
- (c) We should not misuse toilet tissues. _____
- (d) We should not turn off the tap after use. _____
- (e) We must keep our school clean. _____

4- Fill in the blanks:

Sorry, child, early, queue, manners

- (a) We go to bed _____ at night.
- (b) We learn good _____ at home and school.
- (c) Say _____ when you do something wrong.
- (d) A well-mannered _____ is liked by everyone.
- (e) Always stand in a _____ at the bus stop.

5- Circle the thing we use to clean each body part.

COMPUTER

1- Circle the correct picture.

(a) Which is NATURAL?



OR



(b) Which is a MACHINE?



OR



(c) What is the BRAIN of computer?



OR




(d) We use this to TYPE LETTERS



OR



(e) Which is HUMAN-MADE?




OR




2- Write 'N' for Natural and 'H' for Human -made.

Butterfly



Table



Watermelon



Pencil



Cloud



3- Fill in the blanks with the help of given pictures.

(a) Machines save our _____



(b) We see cartoons on the _____



(c) A _____ is not made by human.



(d) We use a _____ to click



(e) _____ is a human-made thing.



ART

1- Join the numbers to complete the picture and colour it neatly.



2- Complete the Bunch of Balloons with Thumb impression method and colour the boy.



MORAL EDUCATION

Look at the picture carefully.



- 1- What do you see in the picture? _____
- 2- Is the child helping or hurting? _____
- 3- Is this a good habit? (Yes / No) _____
- 4- What should you learn from this pictures? _____

(P.T.O)

REASONING

1- Observe the given pattern and find the missing letter, number or shape.

1, 7, 12, ?, 19

(a) 16

(b) 19

(c) 23

(d) 25

2- A, E, I, ?, U


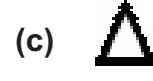
(a) B

(b) D

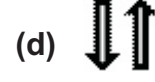
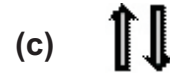
(c) O

(d) N

3-



4-



5-



(a) 30

(b) 15

(c) 5

(d) 35